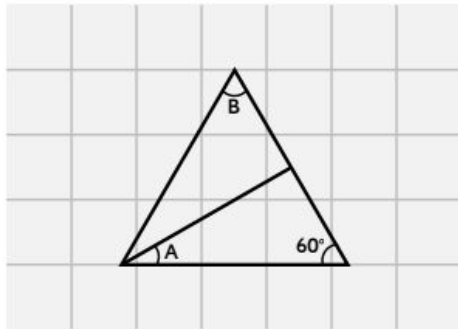


Finding missing angles in shapes

1a. Find the missing angles in the shape.

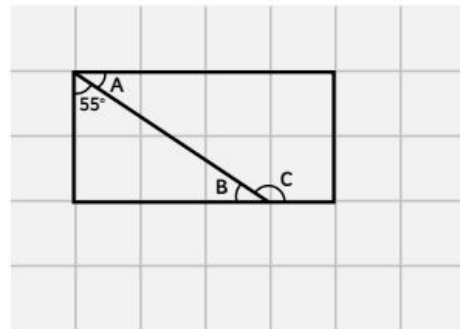


PS



PS

1b. Find the missing angles in the shape.

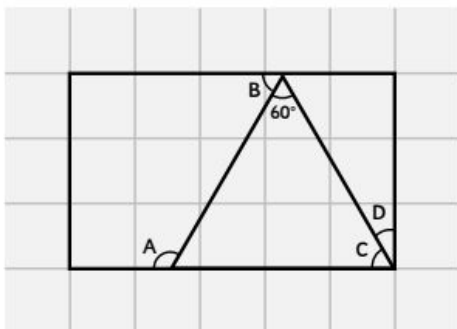


PS

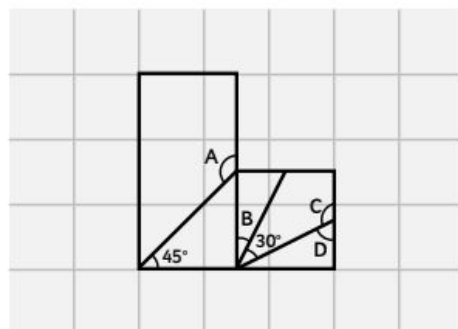


PS

4a. Find the missing angles in the shape.

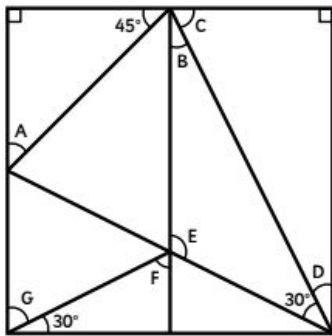


4b. Find the missing angles in the shape.



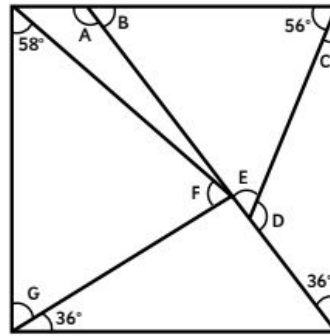
Finding missing angles in shapes

7a. Find the missing angles in the shape.



PS

7b. Find the missing angles in the shape.



PS

Draw a shape of your own using a ruler and calculate the angles.

Which angles do you need to measure using a protractor and which ones can you calculate without using a protractor?