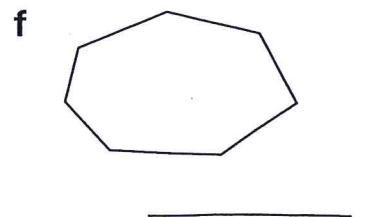
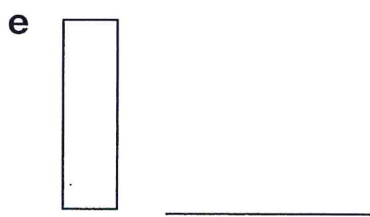
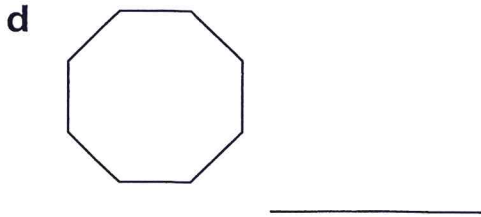
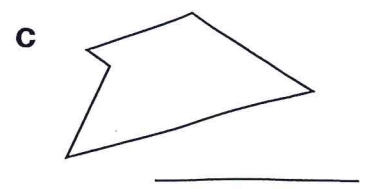
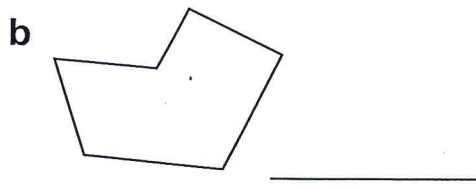
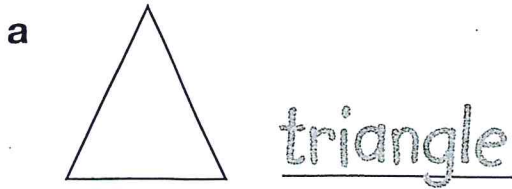
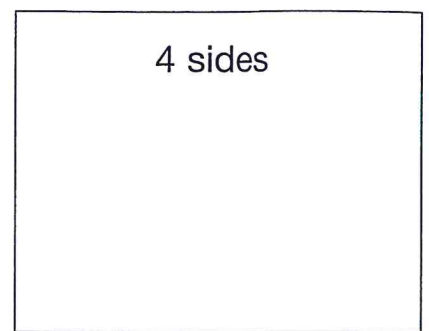
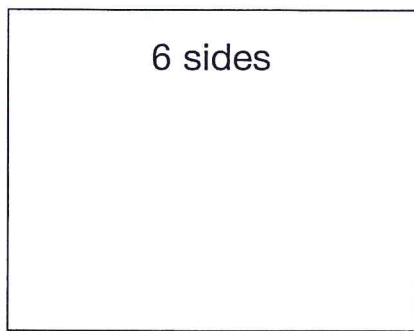
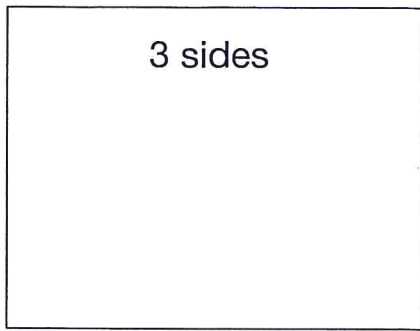


3. Name each of these polygons.



4. Draw three regular polygons with ...



0	Tough	OK	Got it! 11

Total

11

Challenge yourself

Fill in the correct word to complete each description.

hexagons isosceles heptagons quadrilateral equilateral

- a A _____ is any shape with four straight sides.
- b An _____ triangle is an example of a regular polygon.
- c All shapes with six sides are _____.
- d An _____ triangle is an example of an irregular polygon.
- e All _____ have seven sides.