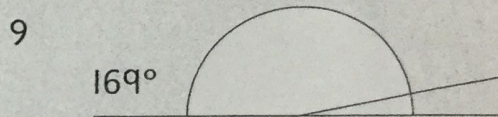







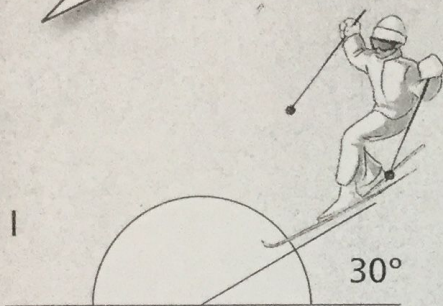


# Angles

Write the missing angle.

1.  $150^\circ$



Two angles make a straight line. If this is the size of one, write the size of the other.

10  $46^\circ$

11  $98^\circ$

12  $113^\circ$

13  $75^\circ$

14  $57^\circ$

15  $179^\circ$

16  $144^\circ$

17  $38^\circ$

Three angles make a straight line. If these are the sizes of the first two, write the size of the third angle.

18  $56^\circ, 73^\circ$

19  $45^\circ, 91^\circ$

20  $114^\circ, 38^\circ$

21  $107^\circ, 44^\circ$

22  $84^\circ, 19^\circ$

23  $56^\circ, 78^\circ$

