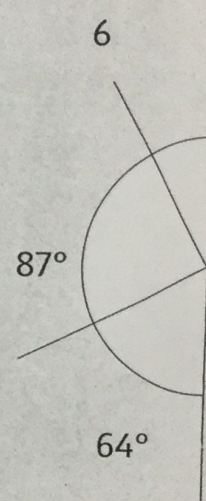
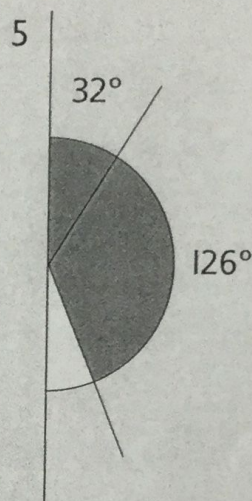
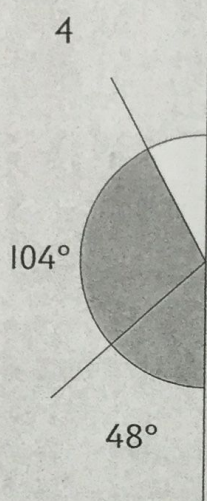
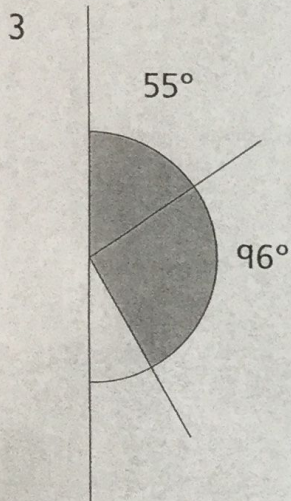
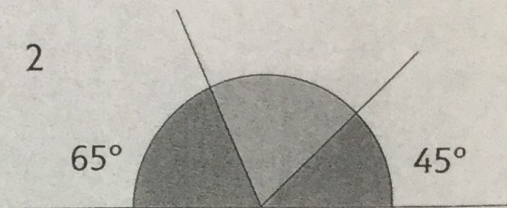
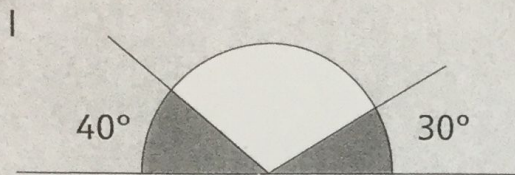


Write the missing angle.



Two angles make a right angle. What are the angles if one is:

- 7 double the other 8 four times the other
 9 five times the other 10 half of 40°
 11 twice the size of 30° 12 four times 10° ?



Explore

Three angles make a straight line.

What could they be if they are all multiples of 5° ?